

Basic Elements of Geometry

PLP 1

Instructions: Match each basic element of geometry with the correct picture.

1 \overleftrightarrow{CD}



2 Line AB




3 Ray AB



4 \overline{CD}



5 Point P



6 Line Segment AB



7 Plane ABC



8 \overleftrightarrow{CD}



Basic Elements of Geometry (alternate)

PLP 1

Instructions: Match each basic element of geometry with the correct picture by writing the number in the right box.

1 \overleftrightarrow{CD}

2 Line AB

3 Ray AB

4 \overline{CD}

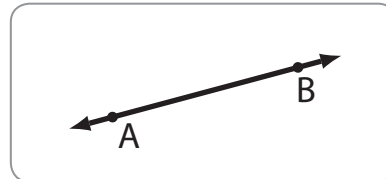
5 Point P

6 Line Segment AB

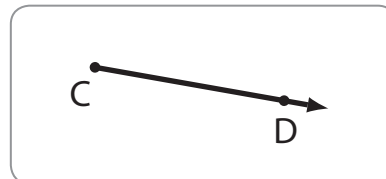
7 Plane ABC

8 \overleftrightarrow{BA}

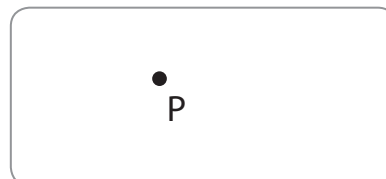
2



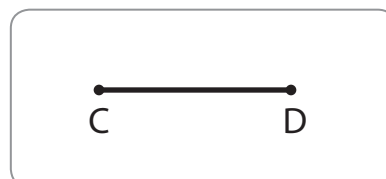
1



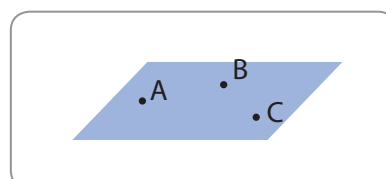
5



4



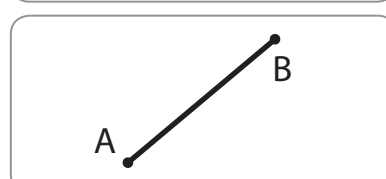
7



8



6



3

